

O. P. JINDAL SCHOOL, SAVITRI NAGAR
Half Yearly Examination (2023 – 2024)

Class / Section: I ()

MM: 40

Subject: Mathematics

Time: 2 Hrs.

Name: _____

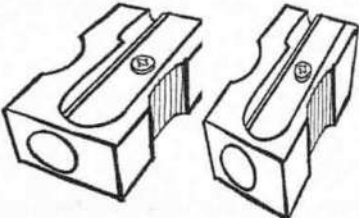

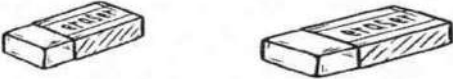

Roll No.: _____

Invigilator's Sign: _____ Marks Obtained: _____

Examiner's Sign: _____

General Instructions: All questions are compulsory.

1) Anil is arranging his pencil box . Count and write the number of items: (6Marks)

| | |
|---|--|
|  | |
|  | |
|  | |
|  | |

i) Write the total number of items _____

ii) Which number is least _____

2) Add:

(4Marks)

i) 4

+ 2

ii) 1 5

+ 0

iii) 1 2

+ 3

iv) 8

+ 2

3) Subtract :

(4Marks)

i) 7

- 2

ii) 1 6

- 0

iii) 1 8

- 4

iv) 9

- 3

4) Word problems:

(4Marks)

i) There are 8 girls and 5 boys in the race . How many are there in all ?

| |
|-------|
| 8 |
| 5 |
| _____ |

ii) Mayank had 17 toffees . He gave away 5 . How many toffees are left ?

| |
|-------|
| 1 7 |
| 5 |
| _____ |

5) Match :

(4Marks)

| A | B |
|----------|----|
| $9 + 5$ | 10 |
| $12 - 2$ | 13 |
| $6 + 6$ | 14 |
| $18 - 5$ | 12 |

6) Fill in the blanks with (<, > or =) :

(4Marks)

i) 29 _____ 22 ii) 15 _____ 15 iii) 5 _____ 33

iv) 23 _____ 23

7) Rewrite the numbers from the biggest to the smallest :

(2Marks)

47 , 49 , 34 \rightarrow _____





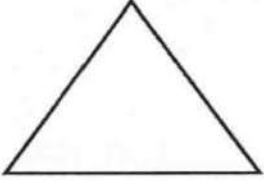



8) Subtract each row and column :

(2Marks)

| | | | |
|--|---|---|--|
| | 6 | 5 | |
| | 4 | 2 | |
| | | | |

9) Match the shapes :

(4Marks)

| A | B |
|---|---|
|  |  |
|  |  |
|  |  |
|  |  |

10) Circle the biggest number :

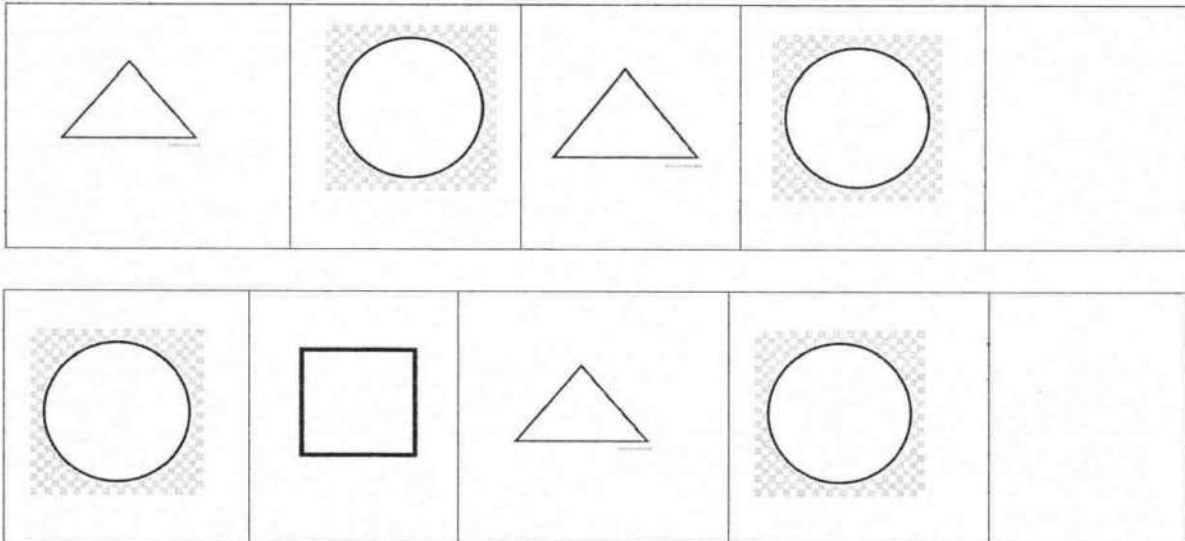
(2Marks)

i) 21 27 20

ii) 39 36 38

11) Draw the missing shapes in the pattern :

(2Marks)



12) Circle the smallest number :

(2Marks)

i) 26 44 32

ii) 45 31 28
